


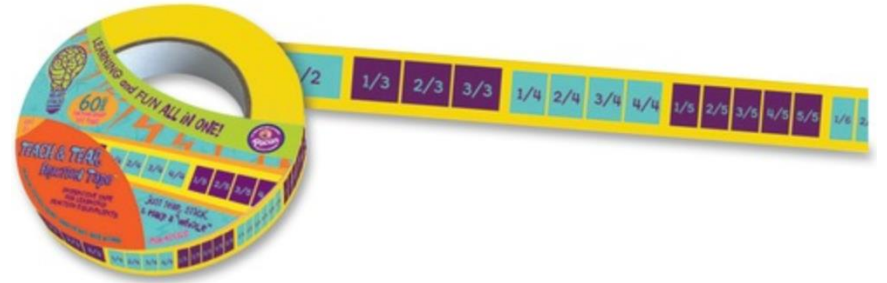
***Required  
Assignment,  
S.A.G.E., Week 3,  
Grade 3***

5/4- 5/8



# *Scavenger Hunt:*

- These days I have had Fractions on my mind.
- To be exact, I've been thinking about the way Fractions are placed on a number line.
- So I looked around my house and took pictures of places which reminded me of a number line with fractions on it.



*Here is one picture I took that reminded me of fractions on a number line:*




- 0 / 5
- 1 / 5
- 2 / 5
- 3 / 5
- 4 / 5
- 5 / 5
- 6 / 5
- 7 / 5
- 8 / 5
- 9 / 5
- 10 / 5
- 11 / 5
- 12 / 5
- 13 / 5
- 14 / 5
- 15 / 5
- 16 / 5



*Here is another-*



***And some  
more!***



# *Your Assignment : Warm Up*



Go on a Scavenger Hunt around your house to find places where you see fractions on a number line (like I did).



**Take 5 pictures similar to the ones that I did. Post them on Seesaw.**

***Your  
Assignment:  
Math  
Exploration***

Choose one of the pictures you took!

Label the picture with fractions.

Here are some fractions to include:  $\frac{1}{2}$ ,  
1,  $\frac{3}{4}$ ,  **$\frac{3}{2}$** , one equivalent fraction.

Have Fun!

# *Optional Assignment*

- Label a second one of your pictures and post it on Seesaw.
- You can decide what fractions you want to label the picture with