


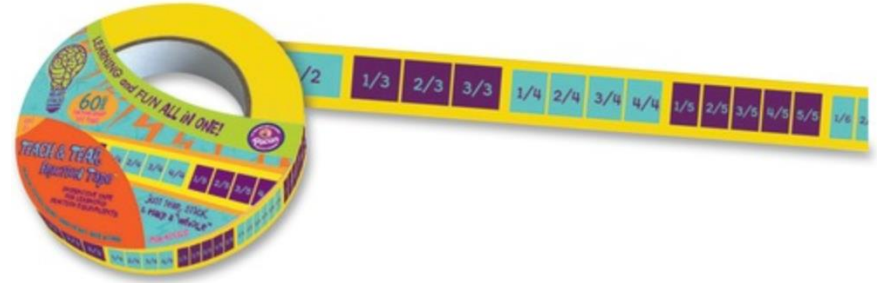


***Challenge Math,
Grade 3***

5/13- 5/20

Scavenger Hunt:

- These days I have had Fractions on my mind.
- To be exact, I've been thinking about the way Fractions are placed on a number line.
- So I looked around my house and took pictures of places which reminded me of a number line with fractions on it.



Here is one picture I took that reminded me of fractions on a number line:



0
/
5

1
/
5

2
/
5

3
/
5

4
/
5

5
/
5

6
/
5

7
/
5

8
/
5

9
/
5

10
/
5

11
/
5

12
/
5

13
/
5

14
/
5


15
/
5

16
/
5



Here is another-

***And some
more!***



Your Assignment : Warm Up



Go on a Scavenger Hunt around your house to find places where you see fractions on a number line (like I did).



Take 5 pictures similar to the ones that I did. Post them on Seesaw.

***Your
Assignment:
Math
Exploration***

Choose one of the pictures you took!

Label the picture with fractions.

Here are some fractions to include: $\frac{1}{2}$,
1, $\frac{3}{4}$, **$\frac{3}{2}$** , one equivalent fraction.

Have Fun!

Optional Assignment

- Label a second one of your pictures and post it on Seesaw.
- You can decide what fractions you want to label the picture with